
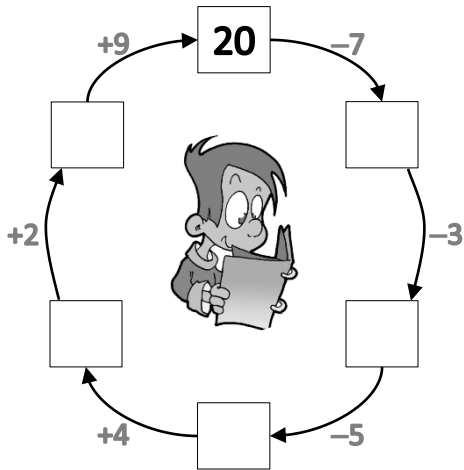


Nome : \_\_\_\_\_

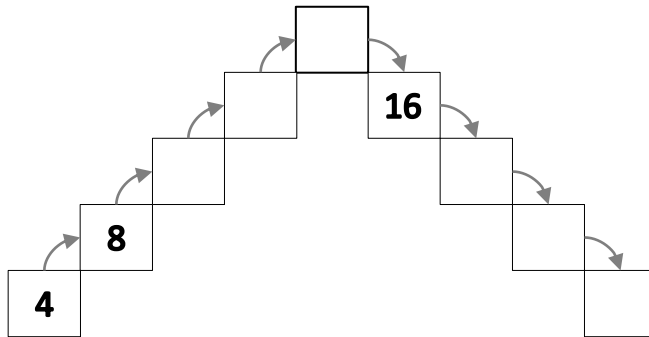
INFORMAÇÃO : \_\_\_\_\_

Data : \_\_\_/\_\_\_/\_\_\_

**1 – Resolva as operações, obedecendo ao sentido indicado.**



**2 – Observa os exemplos e completa.**



**3 – Coloca os sinais >, = ou <.**

$17 - 5$

$8 + 6$

$7 + 11$

$9 + 9$

↓  
□

↓  
□

↓  
□

↓  
□

—

—

$5 + 5 + 4$

$14 - 4$

$13 - 2$

$18 - 6$

↓  
□

↓  
□

↓  
□

↓  
□

—

—