


Nome : _____


INFORMAÇÃO : _____

Data : __/__/__


Sólidos geométricos



cubo



pirâmide




esfera



cilindro



cone



prisma

1 – Estes objectos têm formas de sólidos geométricos. Observa-os e completa o quadro, conforme o exemplo.



A



E




D



C




B



F




G



H



I





J



L



K

	Nome do sólido	Objecto correspondente
	Esfera	E
		F
