

Nome : _____

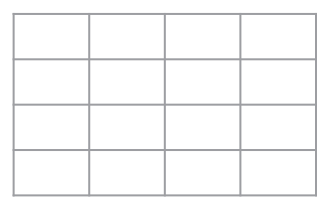
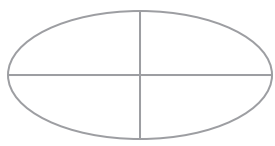
INFORMAÇÃO : _____

Data : __/__/__

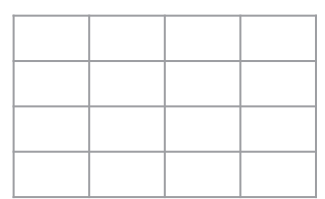
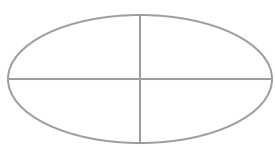
PERCENTAGEM

1 - Pinta a parte de cada figura indicada pelas percentagens.

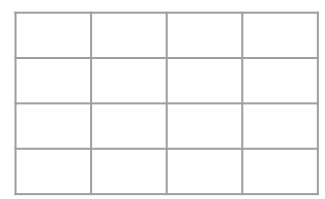
a) 50% ($\frac{1}{2}$)



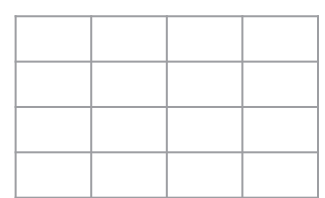
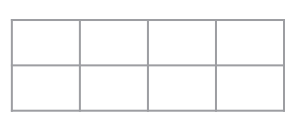
b) 25% ($\frac{1}{4}$)



c) 20% ($\frac{1}{5}$)



d) 10% ($\frac{1}{10}$)



2 - Pinta no quadrado ao lado as partes indicadas.

- 20% de azul
- 10% de verde
- 5% de vermelho
- 3% de cor de laranja
- 2% de preto
- 1% de amarelo

