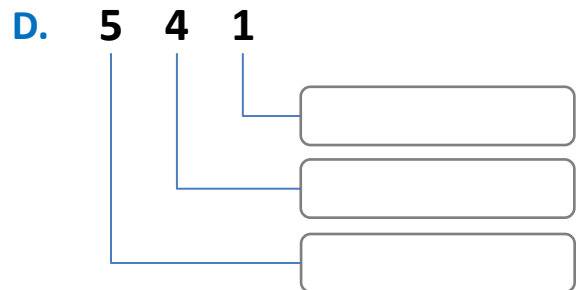
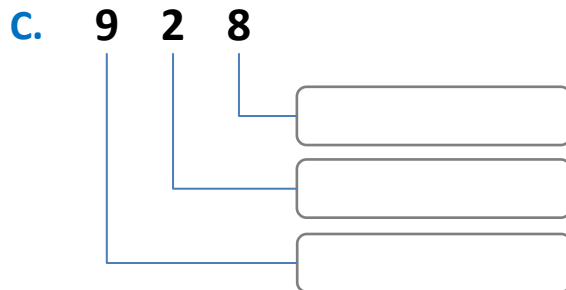
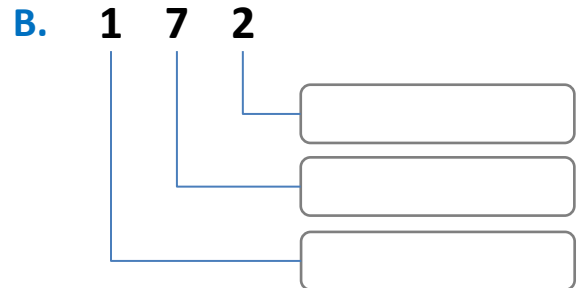
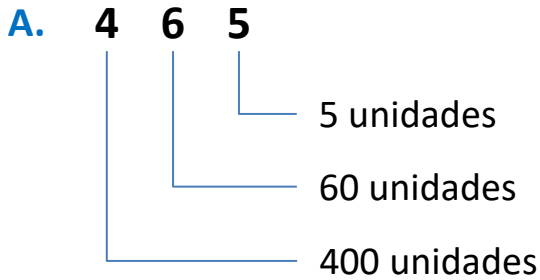


Nome : _____

INFORMAÇÃO :

Data : ___/___/___

1 – Observa o exemplo **A** e completa as situações **B**, **C** e **D**.



2 – Segue o exemplo e completa as igualdades.

1 centena = 100 unidades

a) 4 centenas = _____ unidades

d) 1 milhar = _____ unidades

b) 7 centenas = _____ dezenas

e) 1 milhar = _____ dezenas

c) 1 milhar = _____ centenas

3 – Completa, seguindo o exemplo.

1875 = 1000 + 800 + 70 + 5

1348 = _____ + _____ + _____ + _____

1625 = _____ + _____ + _____ + _____

1076 = _____ + _____ + _____ + _____

1109 = _____ + _____ + _____ + _____

