

Nome: _____

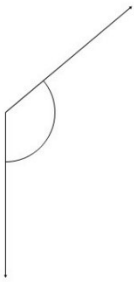
INFORMAÇÃO: _____

Data: __/__/__

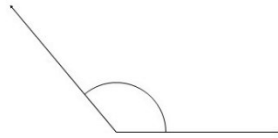
CLASSIFICA OS ÂNGULOS

1


1.



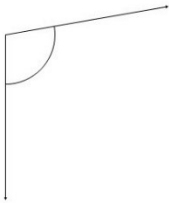
2.



3.



4.



5.



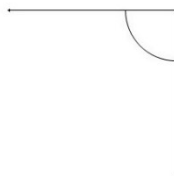
6.



7.



8.



9.

