

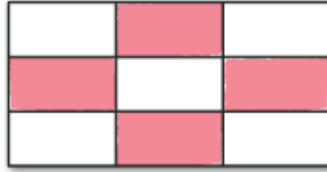
Nome : _____

INFORMAÇÃO : _____

Data : __/__/__

1 – Completa a fração que representa cada parte colorida.

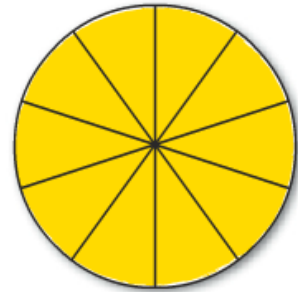














2 – Pinta de acordo com as indicações:

$\frac{4}{5}$ de cada figura.



$\frac{8}{10}$ de cada figura.

