

Nome : _____


INFORMAÇÃO : _____

Data : ___/___/___

Será que já sei?

1 – Pinta as dezenas e as unidades e completa.


29



D	U

___ dezenas
___ unidades


30



D	U

___ dezenas
___ unidades


35



D	U

___ dezenas
___ unidades

39

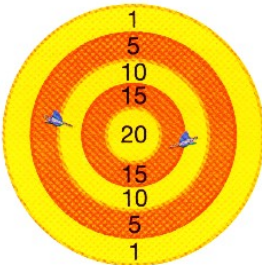


D	U

___ dezenas
___ unidades

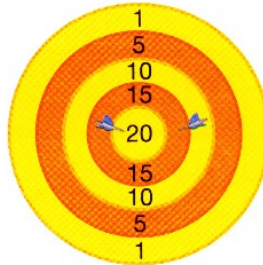
2 – Calcula os pontos que cada amigo totalizou.

Luís



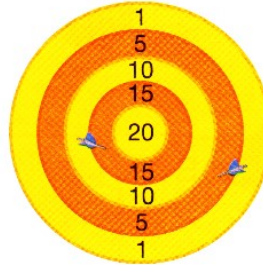
	+		=	
--	---	--	---	--

Irina



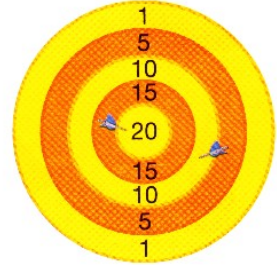
	+		=	
--	---	--	---	--

Marta



	+		=	
--	---	--	---	--

André



	+		=	
--	---	--	---	--

Quem somou mais pontos? _____

3 – Calcula e faz a correspondência.

10 + 10 + 1

10 + 10 + 10 + 5

vinte e três

trinta e cinco

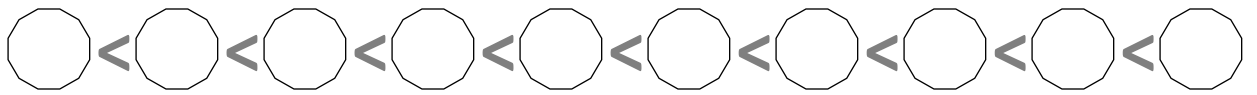
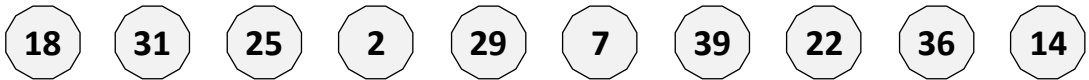
vinte e um

trinta e nove

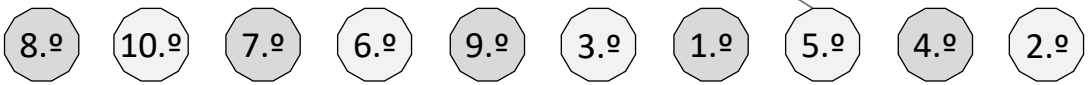
10 + 10 + 10 + 9

10 + 10 + 3

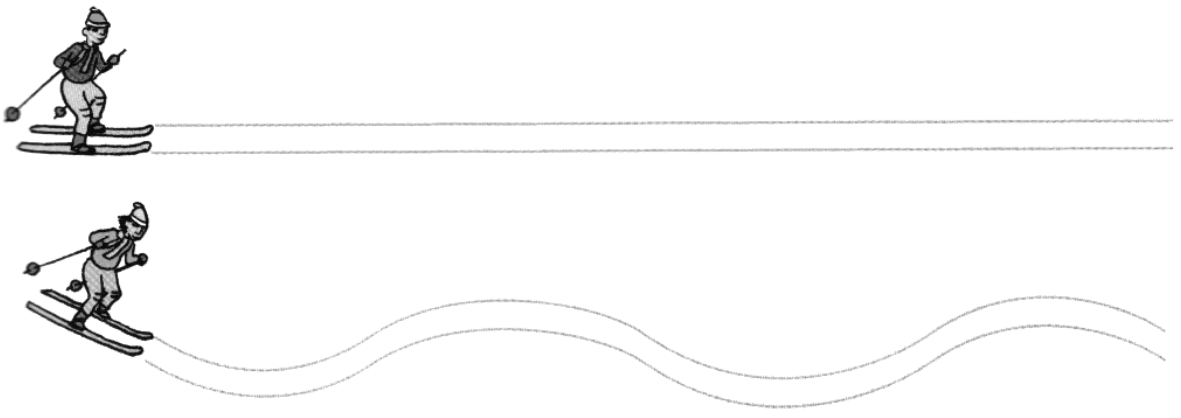
4 – Coloca os seguintes números por ordem crescente.



5 – Observa a ordem de chegada à paragem e liga.



6 – Cobre a azul as linhas rectas e a verde as linhas curvas.



7 – Escreve o nome dos sólidos.

