

Nome : _____


INFORMAÇÃO : _____

Data : __/__/__


FICHA **5**

1 – Escreve o tempo em cada relógio.


1




2




3




4



5



6



7




8




9




10



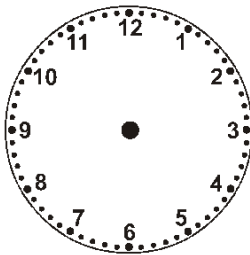

11



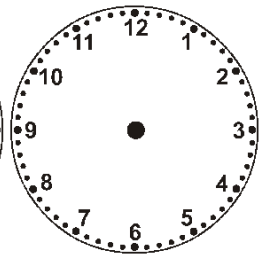

12



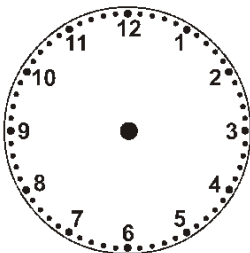

2 – Desenha no relógio da direita a passagem do tempo.



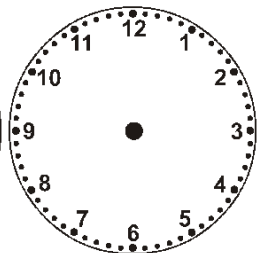

Que horas serão daqui a 5 horas e 30 minutos?



Que horas serão daqui a 4 horas?



Que horas serão daqui a 4 horas?



Que horas serão daqui a 2 horas e 30 minutos?