


Nome : \_\_\_\_\_


INFORMAÇÃO :

Data : \_\_\_/\_\_\_/\_\_\_


1 – Completa, conforme o exemplo.




C	D	U
2	0	6
Duzentos e seis		



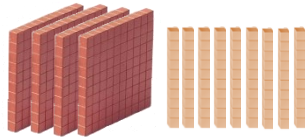
C	D	U




C	D	U




C	D	U




C	D	U




C	D	U



C	D	U



C	D	U



C	D	U

2 – Escreve os números do exercício anterior:

por ordem crescente



por ordem decrescente

