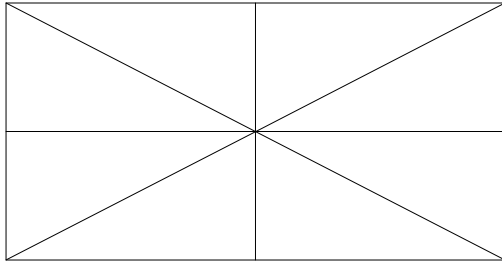


Nome : _____

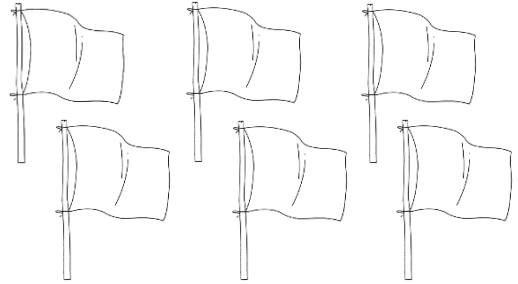
INFORMAÇÃO : _____

Data : ___/___/___

1 – Pinta em cada figura, a parte que corresponde à fração indicada.



$\frac{5}{8}$



$\frac{1}{2}$

2 – Escreve a leitura das seguintes frações:

$\frac{1}{2}$

$\frac{1}{5}$

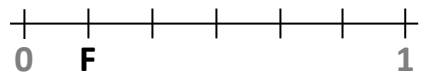
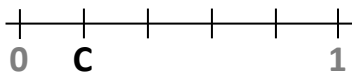

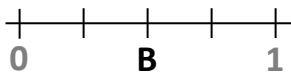
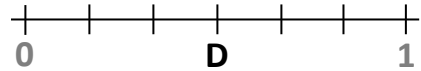
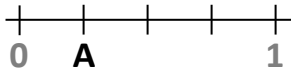
$\frac{1}{3}$

$\frac{1}{10}$

$\frac{1}{4}$

$\frac{1}{100}$

3 – Cada um dos segmentos de reta seguintes possui um ponto identificado por uma letra. Escreve, em cada caso, a fração que lhe corresponde.



A

B

C

D

E

F