


Nome : \_\_\_\_\_

INFORMAÇÃO : \_\_\_\_\_


Data : \_\_/\_\_/\_\_

1 – Completa a fração que representa cada parte colorida.




















2 – Pinta em cada figura, a parte que corresponde à fração indicada.



$$\frac{4}{10}$$



$$\frac{8}{10}$$



$$\frac{3}{10}$$



$$\frac{7}{10}$$



$$\frac{6}{10}$$

$$\frac{9}{10}$$

