


Nome : _____

INFORMAÇÃO :

Data : __/__/__

1 – A Scala, o David e os amigos compraram 27 pacotes de leite e 16

pacotes de sumo. Quantos pacotes compraram?



Podes usar o ábaco horizontal para resolver problemas.


Primeiro deves representar as duas quantidades no ábaco.




Compraram _____ pacotes.

2 – Efetua os cálculos que se seguem usando o ábaco horizontal.


$47 + 18 =$ _____



$51 + 17 =$ _____



$28 + 34 =$ _____



$32 + 46 =$ _____

