

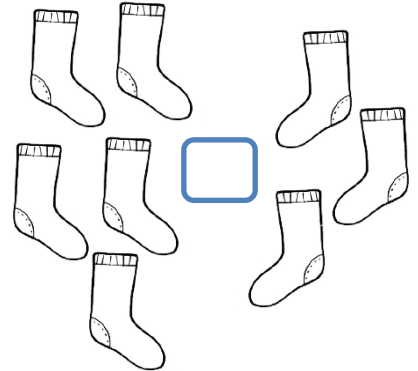


Nome : _____

INFORMAÇÃO : _____

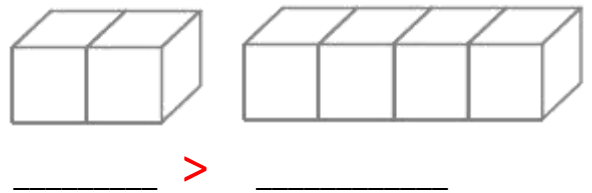
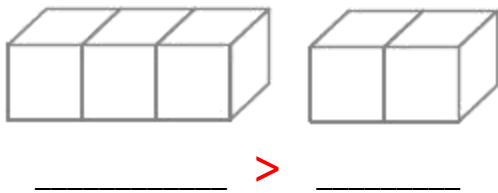
Data : ___/___/___






Completa com os sinais $>$, $<$ ou $=$.



Coloca os números.



Pinta os algarismos que representam:

-  a maior quantidade.
-  a menor quantidade.
-  as quantidades iguais.



Completa com os sinais $>$, $<$ ou $=$.

3 4

2 2

5 2

1 5

3 1

4 4