

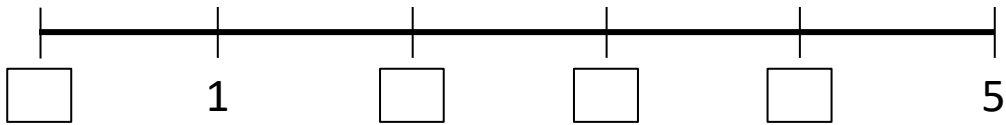
MATEMÁTICA

INFORMAÇÃO:

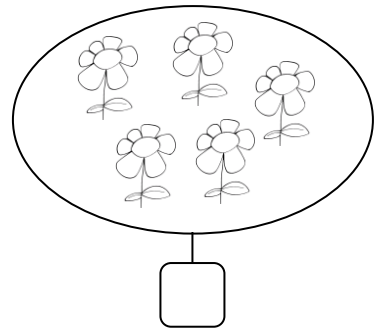
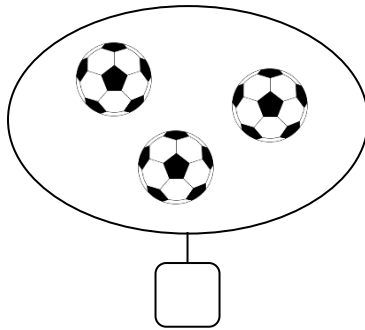

NOME: _____ DATA: ____/____/____

ESCOLA: _____ RUBRICA DO DOCENTE: _____

1 – Completa a régua graduada.



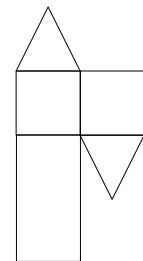
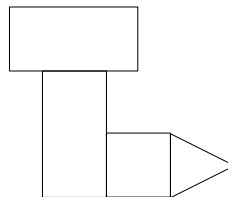
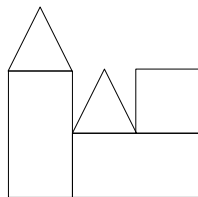
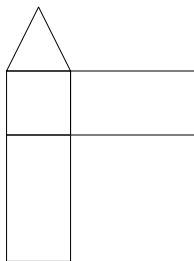
2 – Completa as etiquetas com o número de elementos de cada conjunto.



3 – Pinta da mesma cor as etiquetas que representam o mesmo número.

4
um3
cinco1
quatro5
dois2
três

4 – Pinta da mesma cor as composições que têm o mesmo número de figuras iguais.



5 – Desenha:

- duas árvores no interior;
- um carro no exterior;



6 – Coloca um dos sinais >, < ou =.

$2 \square 3$

$4 \square 1$


$5 \square 2$

$1 \square 3$


7 – Pinta o cão que está do lado esquerdo do palhaço.



8 – Desenha dentro de cada rectângulo linhas abertas e linha fechadas.



linhas abertas



linhas fechadas

9 – Traça o caminho que leva o rato ao queijo.

