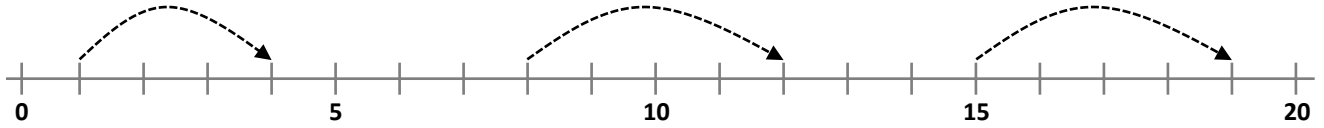


Nome : \_\_\_\_\_

INFORMAÇÃO : \_\_\_\_\_

Data : \_\_\_/\_\_\_/\_\_\_

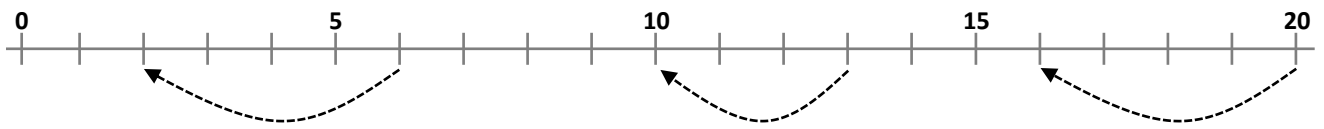
1 – Completa as retas numéricas. Calcula, conforme o exemplo.



1 + 3 = 4

8 + 5 = 13

15 + 4 = 19

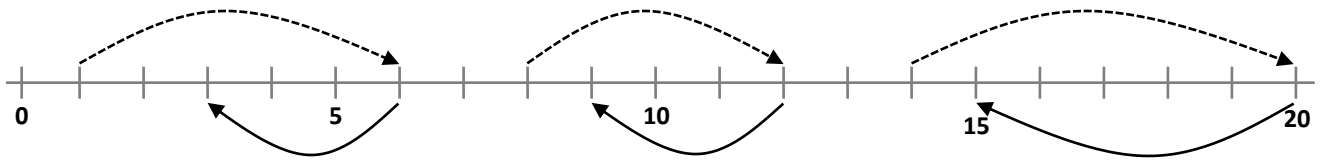


6 - 4 = 2

10 - 5 = 5

15 - 5 = 10

2 – Observa o esquema e calcula de acordo com a indicação das setas.



1 + 5 = 6

6 - 6 = 0

15 - 15 = 0


6 - 3 = 3

10 - 5 = 5

20 - 5 = 15


3 – Escreve os números:

Por ordem crescente →



4 < ○ < ○ < ○ < ○ < ○

← Por ordem decrescente



19 > ○ > ○ > ○ > ○ > ○