

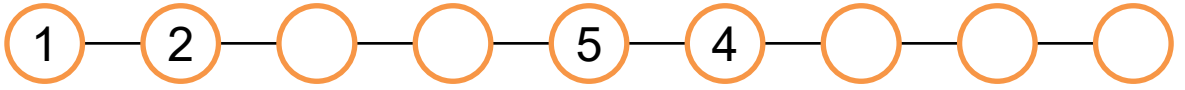
Nome : _____

INFORMAÇÃO : _____

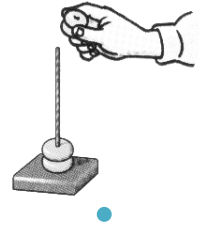
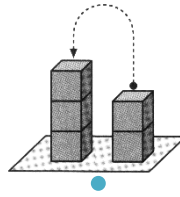

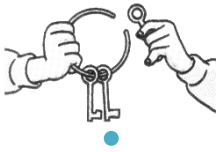
Data : ___/___/___



Completa a série, escrevendo números.



Liga cada figura à adição que ela indica.



$3 + 2 = 5$

$2 + 1 = 3$

$2 + 2 = 4$

$3 + 2 = 5$



Liga as figuras às decomposições correspondentes.




$4 = 2 + 2$




$5 = 2 + 3$



$2 = 1 + 1$



$5 = 4 + 1$



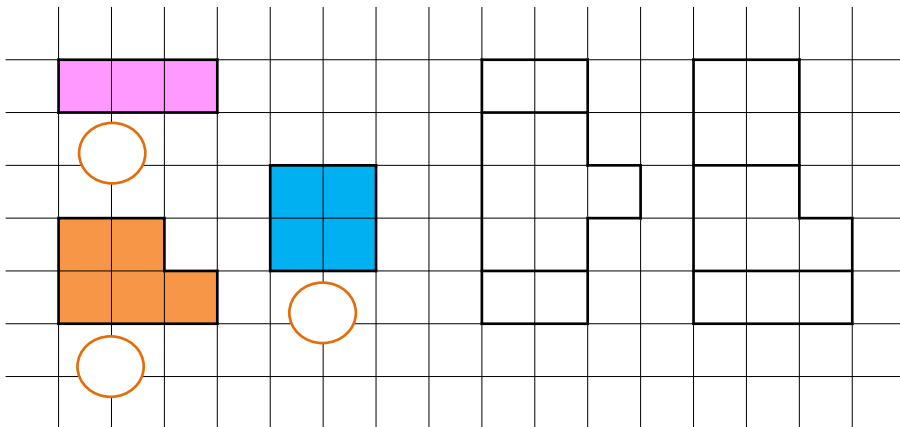
$3 = 2 + 1$



$4 = 3 + 1$



Conta as quadrículas de cada figura e pinta a composição feita com elas.





Efectua as adições.

$$3 + 2 = \square$$
$$1 + 3 = \square$$

$$2 + 1 + 1 = \square$$
$$2 + 1 + 2 = \square$$

$$3 + \square = 4$$
$$2 + \square = 3$$





Completa as decomposições.

$$5 = 3 + \square$$
$$4 = 3 + \square$$
$$2 = 1 + \square$$

$$3 = 1 + 1 + \square$$
$$4 = 2 + 1 + \square$$
$$5 = 2 + 1 + \square$$



Desenha a quantidade de objectos em que cada criança está a pensar.



Responde.

Quantos garfos tem o Daniel?

Quantas pessoas vão comer à mesa?

