
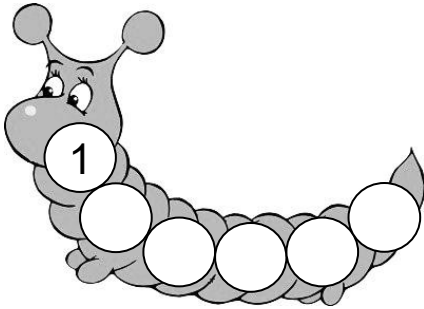


Nome : _____

INFORMAÇÃO : _____

Data : ___/___/___

 **Completa as lagartas.**



 **Em cada grupo, rodeia o maior.**



	4	
2		1
5	3	

2		1
	6	
3		4

	3	2
1		4

 **Completa as seqüências.**

1 + 1 ○ + 1 ○ + 1 ○ + 1 ○ + 1 ○

6 - 1 ○ - 1 ○ - 1 ○ - 1 ○ - 1 ○

5 + 1 ○ - 3 ○ + 1 ○ - 2 ○ + 4 ○


4 + 1 ○ - 2 ○ + 3 ○ - 4 ○ + 2 ○

2 Resolve as tabelas.

+	1	2	3
1			
2			
3			

+	1	2	3	4	5
1					
2					
3					
4					
5					

2 Observa e completa.




$$6 - 1 = \square$$

$$6 - 2 = \square$$


$$6 - 3 = \square$$

$$6 - 4 = \square$$

$$6 - 5 = \square$$


$$4 - 1 = \square$$

$$4 - 2 = \square$$

$$4 - 3 = \square$$



$$5 - 1 = \square$$

$$5 - 2 = \square$$

$$5 - 3 = \square$$


$$5 - 4 = \square$$

2 Efectua.



$$5 = 3 + \square$$

$$5 = 2 + \square$$

$$5 = 1 + 3 + \square$$


$$6 = 4 + \square$$

$$6 = 2 + 2 + \square$$

$$6 = 1 + \square + \square$$