

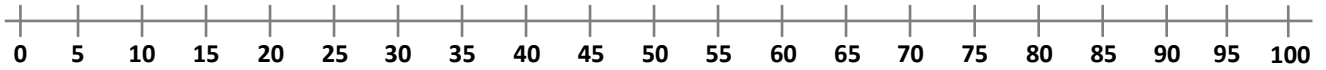
Nome : \_\_\_\_\_

INFORMAÇÃO :

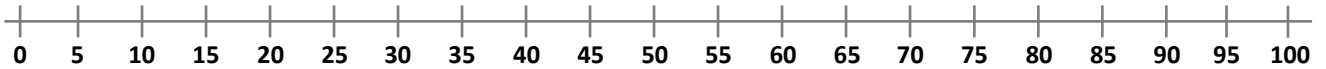
Data : \_\_/\_\_/\_\_

1 – Utiliza a reta numérica para realizares os seguintes cálculos.

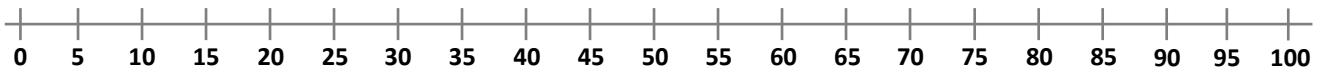
$20 + 11 = \bigcirc$



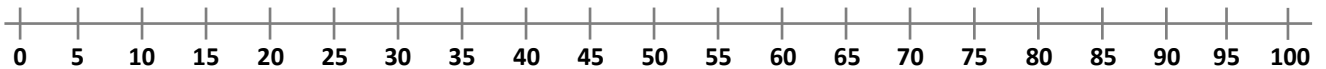
$50 - 11 = \bigcirc$



$30 + 31 = \bigcirc$



$70 - 40 = \bigcirc$



2 – Observa, descobre e completa.

