












Nome : _____

INFORMAÇÃO : _____

Data : __/__/__

1 – Observa a tabela e completa-a.

Centenas	Dezenas	Unidades	Número	Número por extenso
			230	Duzentos e trinta
				
				
				

2 – Descobre outras decomposições para os números e escreve-as.

$$230 = 200 + 30$$

$$230 = \underline{\quad} + \underline{\quad} + \underline{\quad}$$

$$230 = \underline{\quad} + \underline{\quad} + \underline{\quad} + \underline{\quad}$$

$$315 = 200 + 100 + 10 + 5$$

$$315 = \underline{\quad} + \underline{\quad} + \underline{\quad} + \underline{\quad}$$

$$315 = \underline{\quad} + \underline{\quad} + \underline{\quad} + \underline{\quad}$$

$$466 = 400 + 60 + 6$$

$$466 = \underline{\quad} + \underline{\quad} + \underline{\quad}$$

$$466 = \underline{\quad} + \underline{\quad} + \underline{\quad} + \underline{\quad}$$

$$522 = 400 + 100 + 20 + 2$$

$$522 = \underline{\quad} + \underline{\quad} + \underline{\quad} + \underline{\quad}$$

$$522 = \underline{\quad} + \underline{\quad} + \underline{\quad} + \underline{\quad}$$