

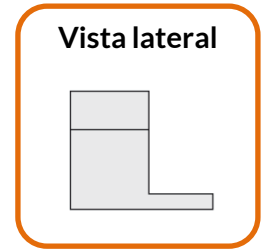
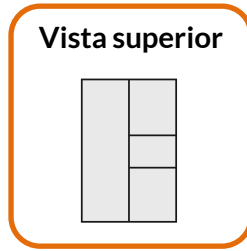
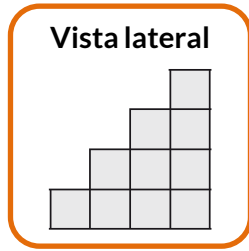
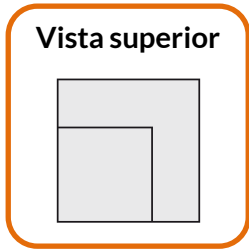
Nome: \_\_\_\_\_

INFORMAÇÃO: \_\_\_\_\_

Data: \_\_/\_\_/\_\_

# VOLUME

1 - Quantos cubos utilizou o André?



•

•

•

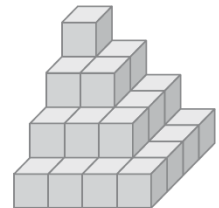
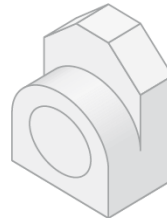
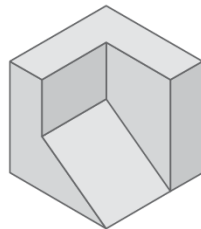
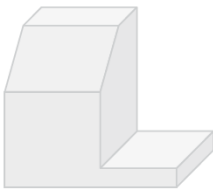
•

•


•

•

•



2 - Observa outra construção que o André fez, com cubos geometricamente iguais, e responde.



a) Quantos cubos utilizou o Pedro?