

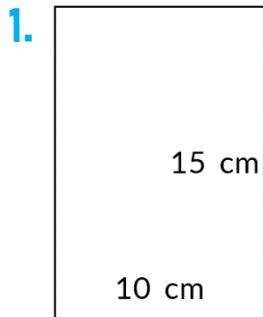
Nome: _____

INFORMAÇÃO: _____

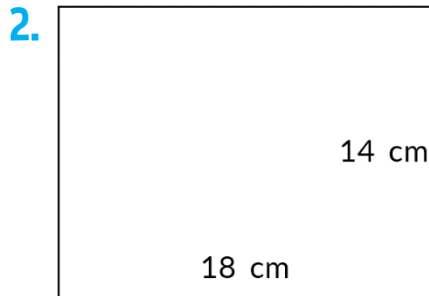
Data: __/__/__

ÁREA

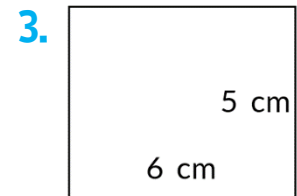
Descobre a área e o perímetro.



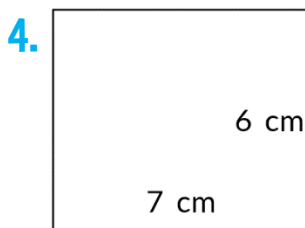
$$A = \underline{\hspace{2cm}}$$
$$P = \underline{\hspace{2cm}}$$



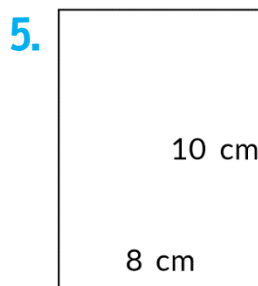
$$A = \underline{\hspace{2cm}}$$
$$P = \underline{\hspace{2cm}}$$



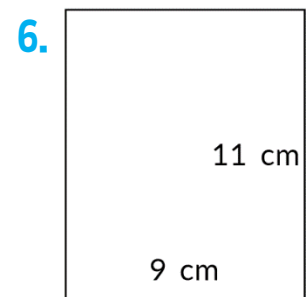
$$A = \underline{\hspace{2cm}}$$
$$P = \underline{\hspace{2cm}}$$



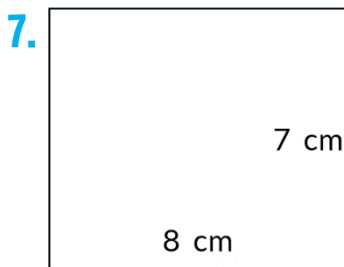
$$A = \underline{\hspace{2cm}}$$
$$P = \underline{\hspace{2cm}}$$



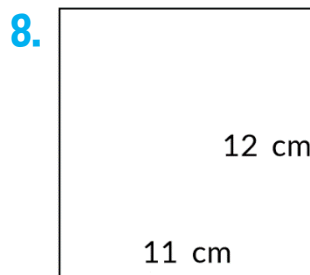
$$A = \underline{\hspace{2cm}}$$
$$P = \underline{\hspace{2cm}}$$



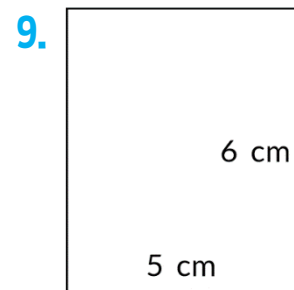
$$A = \underline{\hspace{2cm}}$$
$$P = \underline{\hspace{2cm}}$$



$$A = \underline{\hspace{2cm}}$$
$$P = \underline{\hspace{2cm}}$$



$$A = \underline{\hspace{2cm}}$$
$$P = \underline{\hspace{2cm}}$$



$$A = \underline{\hspace{2cm}}$$
$$P = \underline{\hspace{2cm}}$$