

Nome : _____

INFORMAÇÃO : _____

Data : __/__/__

A multiplicação

1 – Completa as correspondências.

2×5

2×7

3×7

2×9

3×5

2×8

3×9

3×4

14

10

27

12

18


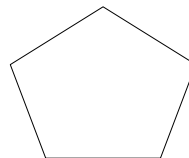
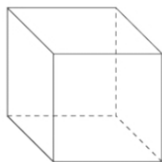
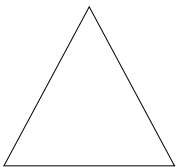
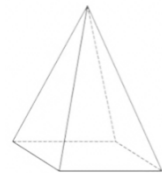

15

16

21

Sólidos geométricos

2 – Pinta de verde os sólidos geométricos apenas.



Efetuar operações em esquemas

3 – Resolve os esquemas apresentados.

