

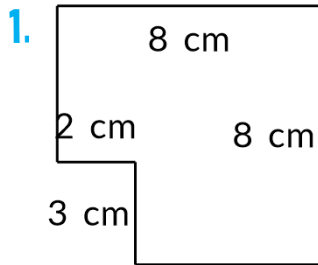
Nome: \_\_\_\_\_

INFORMAÇÃO: \_\_\_\_\_

Data: \_\_/\_\_/\_\_

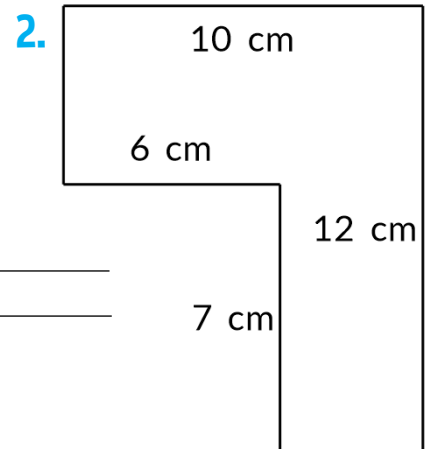
## ÁREA

Descobre a área e o perímetro.



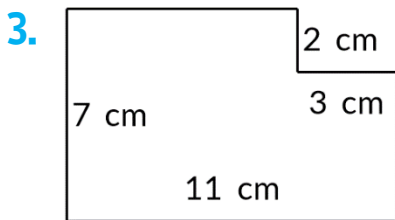
$$A = \underline{\hspace{2cm}}$$

$$P = \underline{\hspace{2cm}}$$



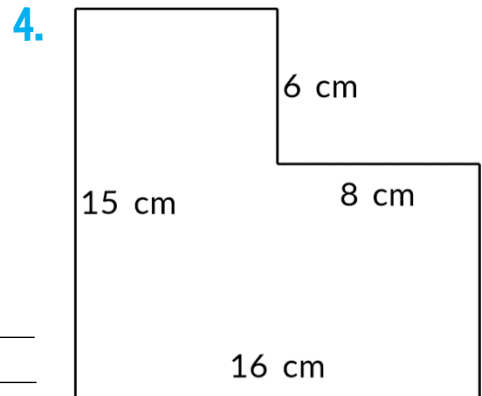
$$A = \underline{\hspace{2cm}}$$

$$P = \underline{\hspace{2cm}}$$



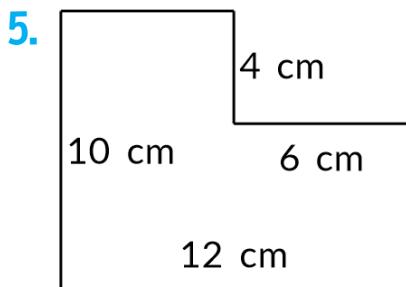
$$A = \underline{\hspace{2cm}}$$

$$P = \underline{\hspace{2cm}}$$



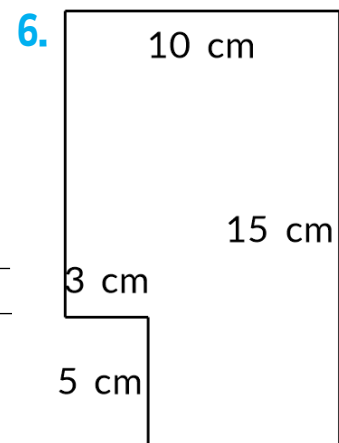
$$A = \underline{\hspace{2cm}}$$

$$P = \underline{\hspace{2cm}}$$



$$A = \underline{\hspace{2cm}}$$

$$P = \underline{\hspace{2cm}}$$



$$A = \underline{\hspace{2cm}}$$

$$P = \underline{\hspace{2cm}}$$