

Nome: _____

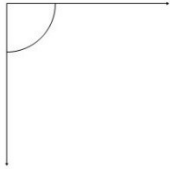
INFORMAÇÃO: _____

Data: __/__/__

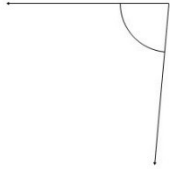
CLASSIFICA E MEDE OS ÂNGULOS

3

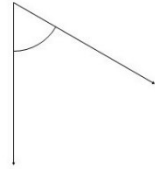
1.



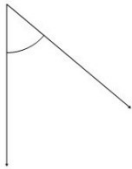
2.



3.



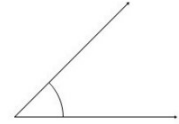
4.



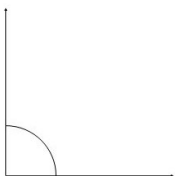
5.



6.



7.



8.



9.

