

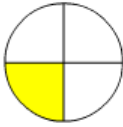

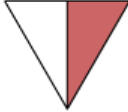







Nome : _____

INFORMAÇÃO : _____

Data : ___/___/___

1 – Associa os 10 pares de figuras e frações. Escreve e desenha na tabela em baixo essas associações, conforme o exemplo.

$\frac{2}{2}$		$\frac{4}{6}$		$\frac{7}{8}$
	$\frac{5}{6}$		$\frac{2}{5}$	
	$\frac{5}{7}$			$\frac{1}{4}$
$\frac{2}{3}$		$\frac{3}{4}$	$\frac{1}{2}$	

$\frac{2}{2}$	