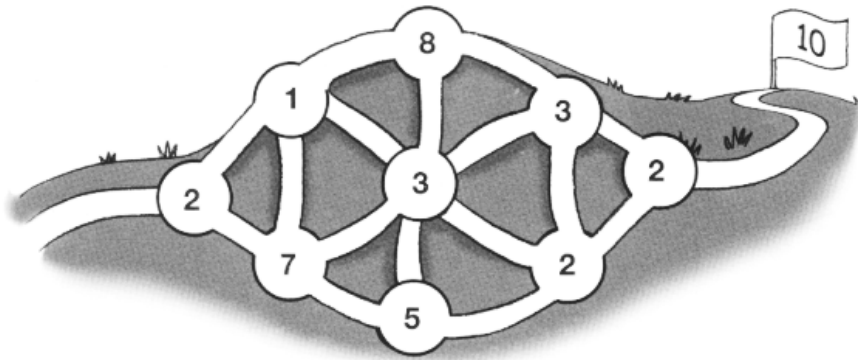


Nome : _____

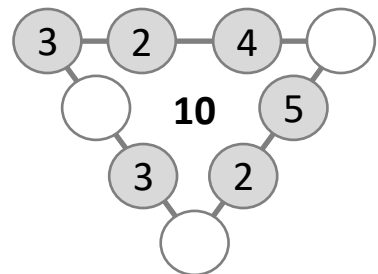
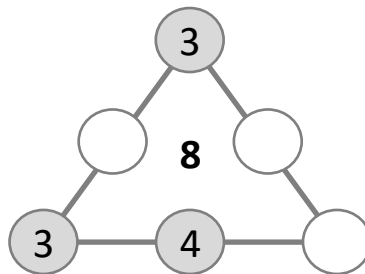
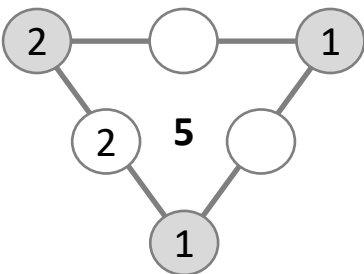
INFORMAÇÃO : _____

Data : ___/___/___

1 – Descobre o caminho, de forma a que totalizes 10 pontos à saída. Pinta-o.



2 – Completa, de modo que a soma de cada um dos lados totalize o número destacado.



3 – Agrupa os objetos, dois a dois, de modo que a soma dos dois valores seja 20.

