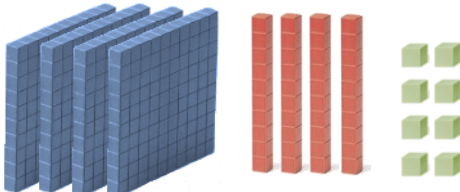


Nome : _____

INFORMAÇÃO :


Data : ___/___/___

1 – Conta e completa.



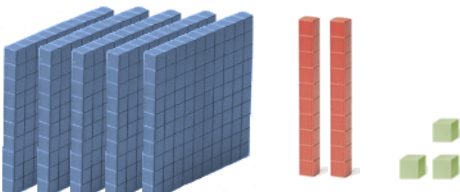
C	D	U

_____ + _____ = _____



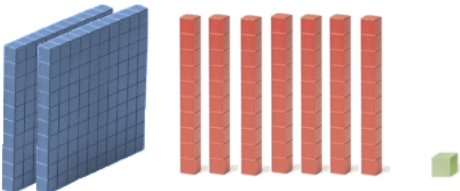
C	D	U

_____ + _____ = _____



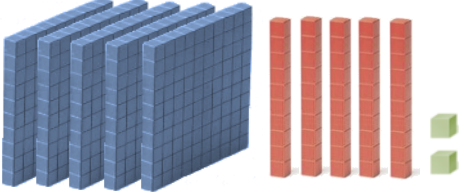
C	D	U

_____ + _____ = _____



C	D	U

_____ + _____ = _____



C	D	U

_____ + _____ = _____

2 – Completa.

$100 + 100 + \underline{\quad} = 250$

$100 + 100 + \underline{\quad} = 300$

$100 + 100 + 100 + \underline{\quad} = 400$

$100 + 100 + 100 + \underline{\quad} = 500$

$200 - 50 + \underline{\quad} = 200$

$180 - 80 + \underline{\quad} = 300$

$300 - 200 + \underline{\quad} = 400$

$500 - 300 + \underline{\quad} = 500$