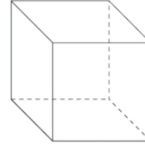

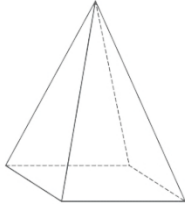


Nome : _____


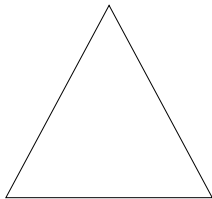
INFORMAÇÃO :

Data : __/__/__

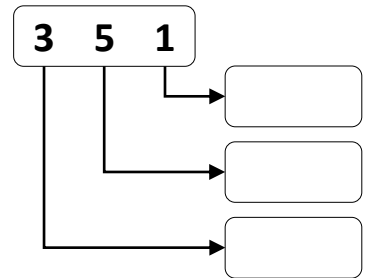
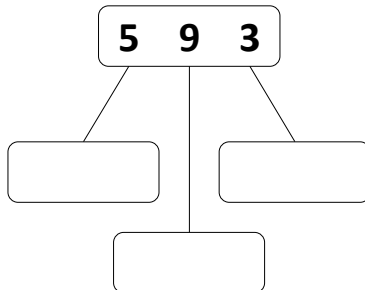
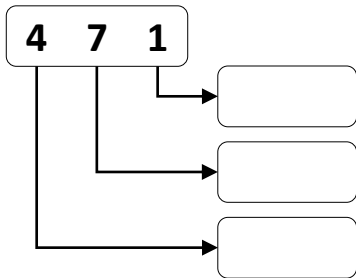
1 – Escreve o nome dos sólidos e pinta só os que têm superfície curvas.



2 – Escreve o nome das figuras geométricas.



3 – Escreve o valor dos algarismos nos números.



4 – Escreve números de 0 a 550 de 50 em 50..

5 – Decompõe:

$$\begin{array}{lll} 500 = \underline{\quad} + \underline{\quad} & 590 = \underline{\quad} + \underline{\quad} & 512 = \underline{\quad} + \underline{\quad} + \underline{\quad} \\ 500 = \underline{\quad} \times \underline{\quad} & 510 = \underline{\quad} + \underline{\quad} & 538 = \underline{\quad} + \underline{\quad} + \underline{\quad} \\ 500 = \underline{\quad} - \underline{\quad} & 550 = \underline{\quad} + \underline{\quad} & 599 = \underline{\quad} + \underline{\quad} + \underline{\quad} \end{array}$$

6 – Efetua as operações.

$122 \times 5 = \underline{\quad}$

| | C | D | U |
|---|---|---|---|
| | — | — | — |
| X | — | — | — |
| | | | |

$578 - 135 = \underline{\quad}$

| | C | D | U |
|---|---|---|---|
| | — | — | — |
| - | — | — | — |
| | | | |

$126 + 342 = \underline{\quad}$

| | C | D | U |
|---|---|---|---|
| | — | — | — |
| + | — | — | — |
| | | | |

8 – Resolve as situações problemáticas.

8.1 Quantas peras há em 4 caixas de 90 peras?

R.: _____

8.2 O caminhão começou a viagem com 580 sacos de cimento, mas já descarregou 120. Quantos leva ainda?

R.: _____

8.3 Numa corrida contaram-se 260 rapazes e 312 raparigas.
Quantas pessoas vão na corrida?

R.: _____