

MATEMÁTICA

INFORMAÇÃO:

NOME: _____ DATA: ____/____/____

ESCOLA: _____ RUBRICA DO DOCENTE: _____

1 – *Escreve os algarismos.*

dois - _____

um - _____

sete - _____

seis - _____

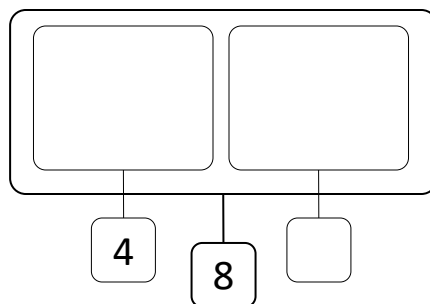

três - _____

cinco - _____

nove - _____

quatro - _____

oito - _____

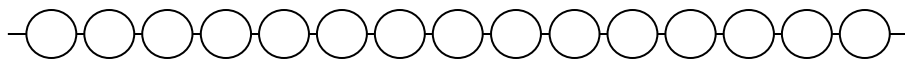

2 – *Escreve os números nas etiquetas ou desenha os elementos em falta.*3 – *Observa e completa.*

$$\begin{array}{c} \boxed{8} \\ \swarrow \quad \searrow \\ \boxed{6} + \boxed{2} \end{array}$$

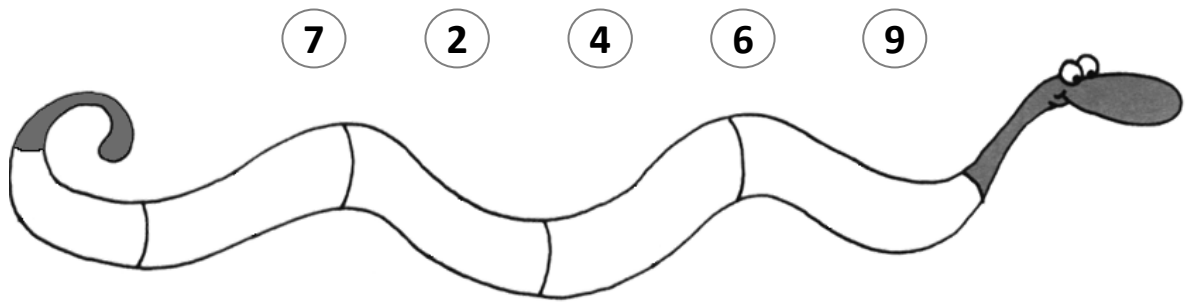
$$\begin{array}{c} \boxed{8} \\ \swarrow \quad \searrow \\ \boxed{5} + \boxed{} \end{array}$$

$$\begin{array}{c} \boxed{9} \\ \swarrow \quad \searrow \\ \boxed{4} + \boxed{} \end{array}$$

$$\begin{array}{c} \boxed{9} \\ \swarrow \quad \searrow \\ \boxed{} + \boxed{} \end{array}$$

4 – *Pinta 9 contas no colar de contas.*5 – *Pinta as etiquetas que representam o número 7.*

6 – Ordena os números por ordem decrescente.



7 – Completa com a simbologia $<$, $>$ ou $=$.

$3 \square 6$

$8 \square 8$

$7 \square 6$

$7 \square 8$

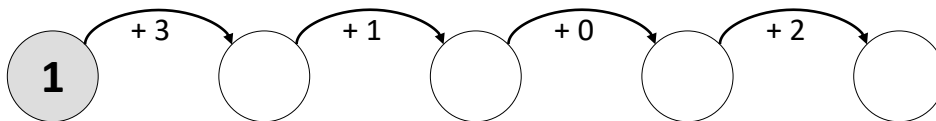
$7 \square 5$

$9 \square 7$


$6 \square 9$

$6 \square 6$

8 – Completa.

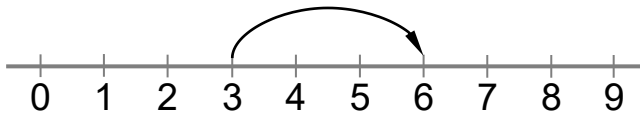


9 – Pinta a gravura de acordo com os resultados das operações e as cores indicadas pelo código.

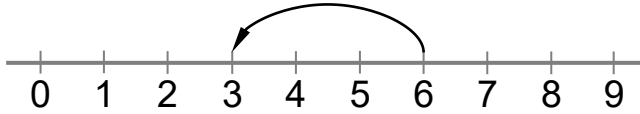


CÓDIGO	
resultado	cor
5	verde
6	amarelo
7	vermelho
9	azul
8	castanho
4	rosa

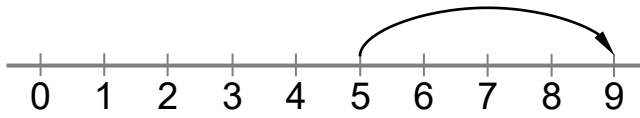
10 – Completa de acordo com os exemplos.



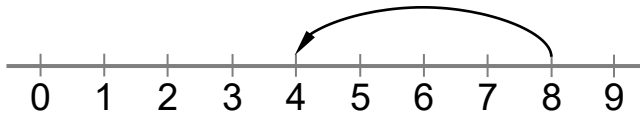
$$\boxed{3} + \boxed{3} = \boxed{6}$$



$$\boxed{6} - \boxed{3} = \boxed{3}$$







$$\boxed{} \ominus \boxed{} = \boxed{}$$




$$\boxed{} \ominus \boxed{} = \boxed{}$$

11 – Observa a composição de figuras geométricas.

Completa a tabela com o número de figuras que a compõem.



12 – A Dona galinha tinha 8 ovos no seu ninho, mas retirou 4. Quantos ficaram no ninho?



$$\boxed{} \ominus \boxed{} = \boxed{}$$

Ficaram ____ ovos no ninho.

13 – O Roberto tinha 3 berlindes. Na sua festa de aniversário recebeu 6 berlindes.

Com quantos berlindes ficou?



$$\boxed{} \oplus \boxed{} = \boxed{}$$

Ficou com ____ berlindes.